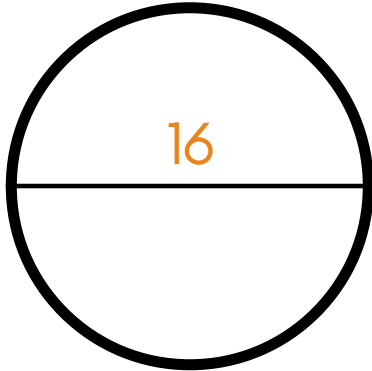
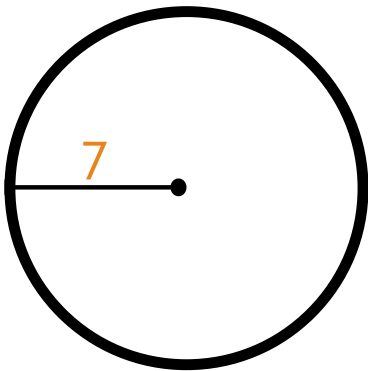


Circles #1

1) What is the area of the circle? What is the circumference?



2) What is the area of the circle? What is the circumference?



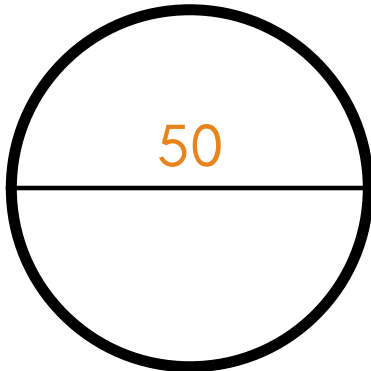
3) What is the area of a circle with a diameter of 10?

4) What is the circumference of a circle with a radius of 4?

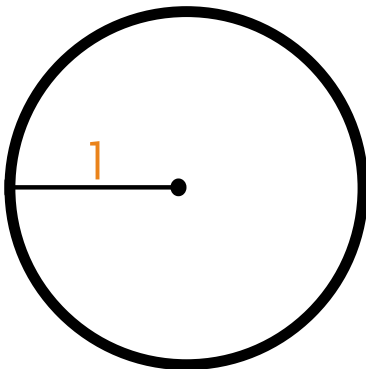
5) What is the diameter of a circle with an area of 81π ?

Circles #2

1) What is the area of the circle? What is the circumference?



2) What is the area of the circle? What is the circumference?



3) What is the circumference of a circle with a radius of 5?

4) What is the radius of a circle with a circumference of 16π ?

5) What is the diameter of a circle with an area of 25π ?